

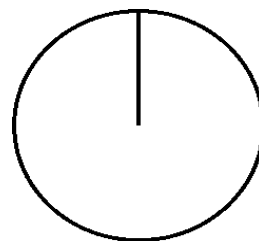
Pizza-regning (46)

Omregn fra brøk til procent (med 1 decimal) og fra brøk til grader (hele tal).

Tegn derefter procentcirklen

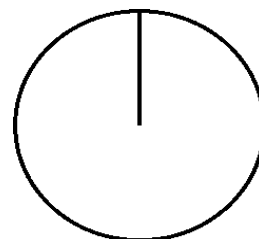
$$\frac{2}{6} = \frac{\cdot 100}{=} =$$

$$\% = \frac{\cdot 360}{=} =$$



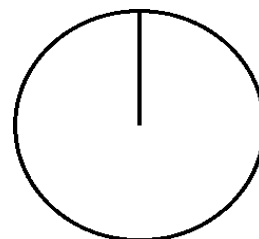
$$\frac{4}{7} = \frac{\cdot 100}{=} =$$

$$\% = \frac{\cdot 360}{=} =$$



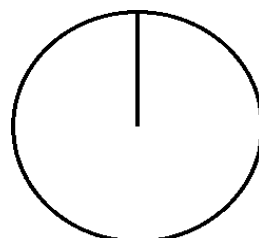
$$\frac{5}{9} = \frac{\cdot 100}{=} =$$

$$\% = \frac{\cdot 360}{=} =$$



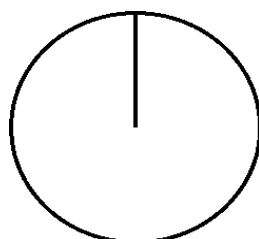
$$\frac{2}{3} = \frac{\cdot 100}{=} =$$

$$\% = \frac{\cdot 360}{=} =$$



$$\frac{3}{7} = \frac{\cdot 100}{=} =$$

$$\% = \frac{\cdot 360}{=} =$$



$$\frac{3}{9} = \frac{\cdot 100}{=} =$$

$$\% = \frac{\cdot 360}{=} =$$

